

Name(s): _____









Major Chord Progression Organizer

Identify the key of your progression and complete the diatonic chord chart by spelling the scale.

Key: _____

I	ii	iii	IV	V	vi	vii^o

Create a four chord progression using this chart. Each progression should start or end on a stable chord. Write the Roman numeral and root note of each chord at the bottom.

<i>Stable</i>   <i>Unstable</i>	I		Anything
	vi		IV, V, I, ii
	IV		I, V, vi, iii
	V		I, IV, vi
	iii		vi, I, IV, ii
	ii		V, IV, iii

	Chord 1	Chord 2	Chord 3	Chord 4
Roman Numeral				
Chord Letter				