

Dynamic Chord Worksheet

Complete the chord quality and construction chart.

Quality	Symbol	Formula	Construction
Major	C	R 3 5	Base chord shape
Minor			
Sus2			
Sus4			
Major 7			
Dom 7			
Minor 7			

Direction Recall

Answer the following questions about direction changes.

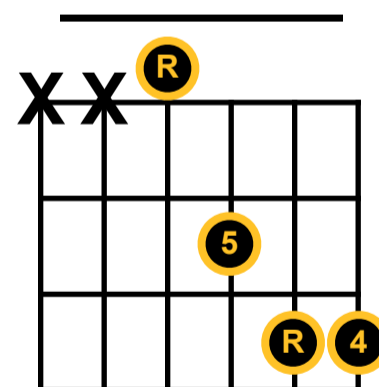
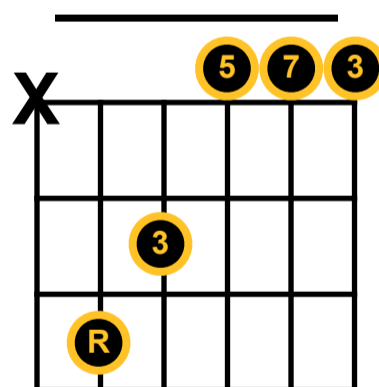
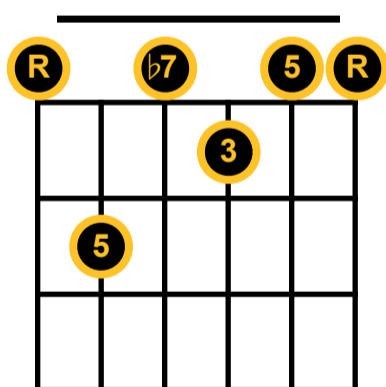
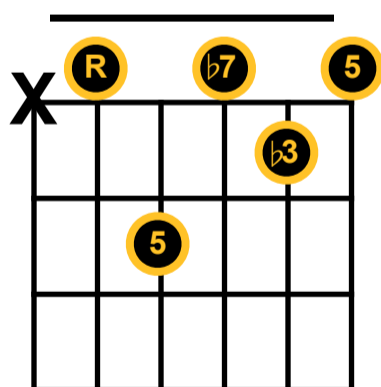
If a finger is on the 3rd fret and it has to be lowered two frets, what fret is it moved to? _____

A $\flat 3$ rd is how many frets below the 3rd? _____

If a finger is on the 1st fret and it has to be raised one fret, what fret is it moved to? _____

Identification

Write in the letter name and quality of the chord pictured in the space above each chart.



Reverse Identification

Complete the charts by notation the open strings and chord tones on the fretboard for the following chords.

Gmaj7

D7

Emin

Asus2

